



L.Obj: to work with distance tables

# To work with Distance Tables

	Southwold	Norwich	Lowestoft	Harleston	Great Yarmouth	Bungay
Beccles			11			
Bungay	22					
Great Yarmouth		19				
Harleston		30				
Lowestoft						
Norwich						

Transfer the information about the distance from Beccles to lowestoft and Great Yarmouth to Norwich on the the map in the diagram



Fill in the distances chart using the information in the map provided. Two have been done for you.

	Southwold	Norwich	Lowestoft	Harleston	Great Yarmouth	Bungay
Beccles			11			
Bungay	22					
Great Yarmouth		19		39		
Harleston		30				
Lowestoft						
Norwich	43					

Transfer the information about the distance from Beccles to lowestoft and Great Yarmouth to Norwich on the the map in the diagram

Fill in the distances chart using the information in the map provided. Two have been done for you.



	Southwold	Norwich	Lowestoft	Harleston	Great Yarmouth	Bungay
Beccles			11			
Bungay	22					
Great Yarmouth		19				
Harleston		30				
Lowestoft						
Norwich						

Transfer the information about the distance from Beccles to lowestoft and Great Yarmouth to Norwich on the the map in the diagram

Fill in the distances chart using the information in the map provided. Two have been done for you.



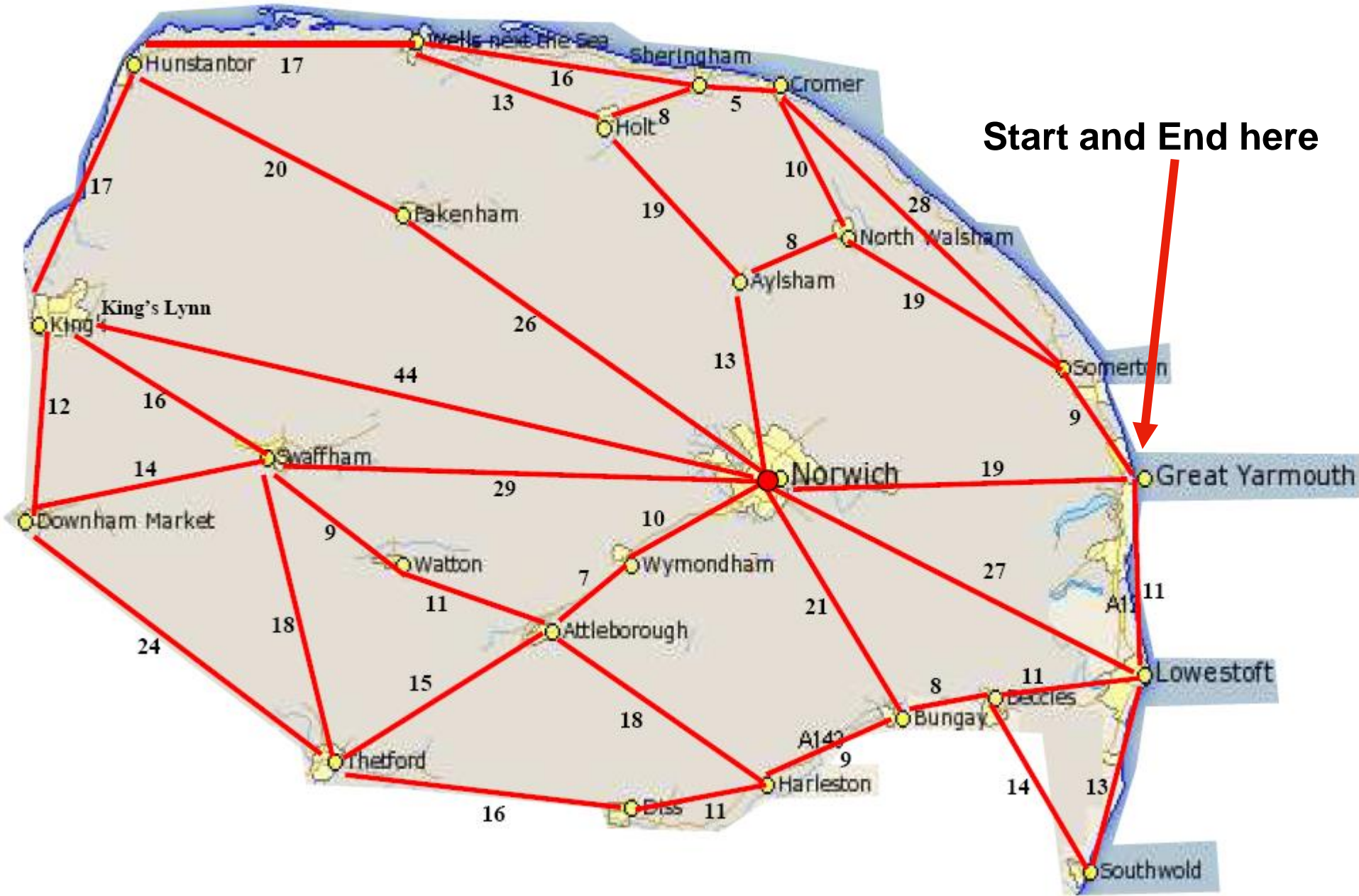
# Easter Egg Hunt

**Now that you know how to read the map, you need to go on a trip round Norfolk using the roads and distances marked.**

**Each town has a different number of eggs.**

**Keep a tally of the Eggs and Miles as you go along.**

L.Obj: to work with distance tables




Each Place has a different number of Easter Eggs to be collected.


The list below is the number in each place.

You have to choose a route that will gain the most Eggs, without travelling any more than 250 miles.

<b>Attleborough</b>	<b>3</b>	<b>Kings Lynn</b>	<b>6</b>
<b>Aylsham</b>	<b>2</b>	<b>Lowestoft</b>	<b>6</b>
<b>Beccles</b>	<b>4</b>	<b>North Walsham</b>	<b>4</b>
<b>Bungay</b>	<b>3</b>	<b>Norwich</b>	<b>10</b>
<b>Cromer</b>	<b>5</b>	<b>Sherringham</b>	<b>5</b>
<b>Diss</b>	<b>4</b>	<b>Somerton</b>	<b>1</b>
<b>Downham Market</b>	<b>3</b>	<b>Southwold</b>	<b>3</b>
<b>Fakenham</b>	<b>6</b>	<b>Swaffham</b>	<b>5</b>
<b>Great Yarmouth</b>	<b>7</b>	<b>Thetford</b>	<b>5</b>
<b>Harleston</b>	<b>2</b>	<b>Watton</b>	<b>2</b>
<b>Holt</b>	<b>3</b>	<b>Wells</b>	<b>2</b>
<b>Hunstanton</b>	<b>4</b>	<b>Wymondham</b>	<b>5</b>



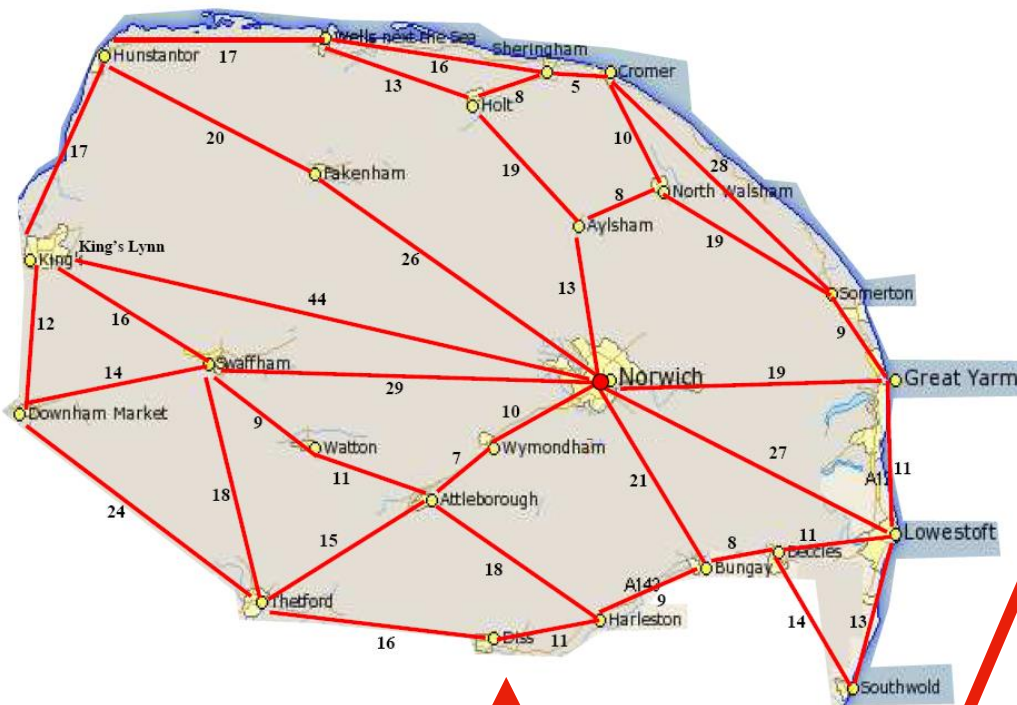
If you travel from Norwich to Swaffham, you gain 15 eggs. 10 For being in Norwich and 5 for getting to Swaffham!



If you then travel back from Swaffham to Norwich, you DO NOT get the Eggs again, once you collect them, they are gone!



L.Obj: to work with distance tables



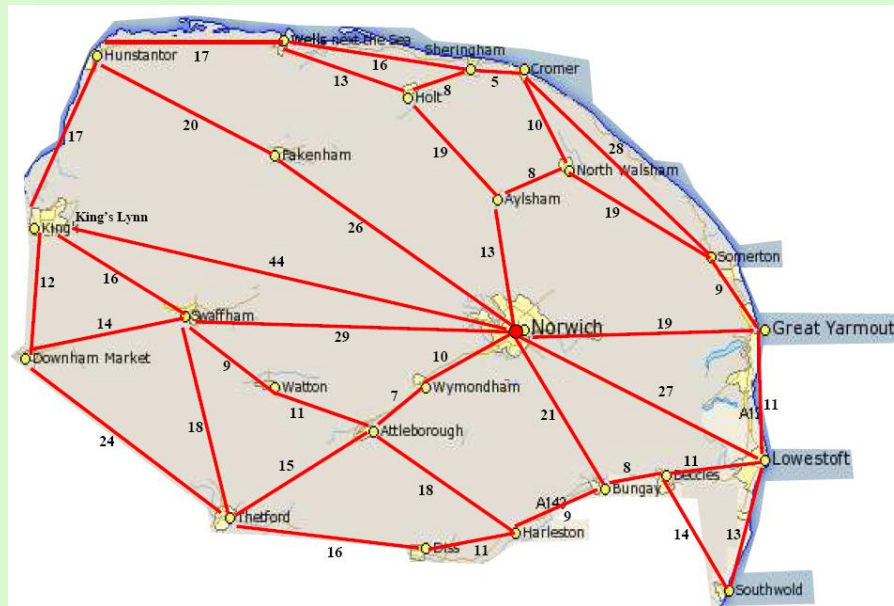
Keep your journey on this chart so you know exactly where you have been and are going next.

<u>Route Planner</u>			
<u>Town Visited</u>	<u>Eggs Collected</u>	<u>Miles Travelled</u>	<u>Miles remaining</u>
1			
2			
3			
4			
5			
6			
7			
8			
9			
10			
11			
12			
13			
14			
15			
16			
17			
18			
19			
20			
21			
22			
Totals			

# Easter Egg Hunt : My Solution

## Journey

Places visited in the order you visit them and distance travelled here



## Eggs Collected

The number of Eggs you collect will go here, alongside where you got them.

Mark your route on the map

If more than one team has the highest number of eggs, the best poster wins!

**Remember, there is no correct answer, only your answer.**

**There will be a prize**

**for the largest number of eggs,**

**Tie Break: Best poster**